

1.  
**KHÔI ĐỘNG**



# CẢNH ĐIỀU TUỔI THƠ

BẢN QUYỀN  
POWERPOINT  
TRÒ CHƠI





**Thả điều là một trò chơi dân gian gắn liền với tuổi thơ của các bạn nhỏ. Nào bây giờ chúng ta cùng nhau đi thả điều. Mỗi câu trả lời đúng của các em sẽ giúp cho những bạn nhỏ trong trò chơi có thêm những con điều mới nhé!**

Học tiếp





$3 + 5 - 2 = ?$

A. 4



B. 5



C. 3



D. 6





$4 + 2 - 5 = ?$

A. 0



B. 1



C. 3



D. 2





$1 + 7 - 4 = ?$

A. 4



B. 2



C. 3



D. 5





$10 - 4 - 3 = ?$

A. 2



B. 1



C. 3




D. 4




CHỦ ĐỀ  
3


PHÉP CỘNG, PHÉP TRỪ TRONG  
PHẠM VI 10


Bài 12: Bảng cộng, bảng trừ  
trong phạm vi 10






Khám phá





Khám phá

## Bảng cộng



$$1 + 6 = 7$$


$$2 + 5 = 7$$

$$3 + 4 = 7$$


$$4 + 3 = 7$$








$$5 + 2 = 7$$

$$6 + 1 = 7$$





$$1 + 6 = 7$$






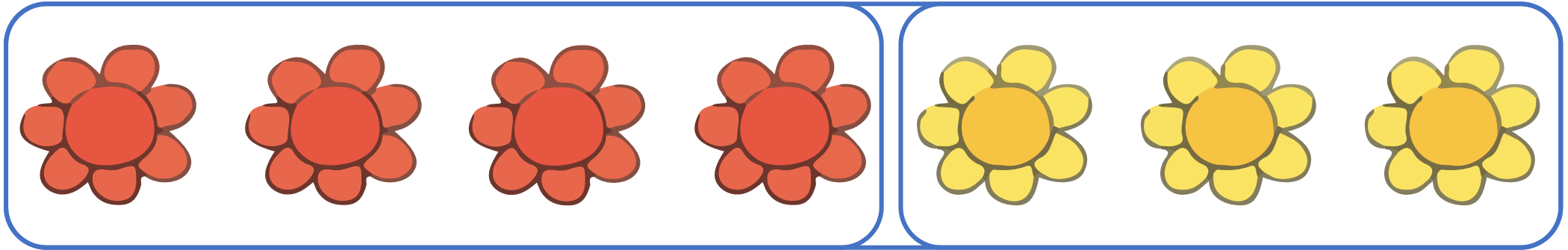
$$2 + 5 = 7$$







$$3 + 4 = 7$$







$$4 + 3 = 7$$






$$5 + 2 = 7$$





$$6 + 1 = 7$$





# 1 SỐ

+	1	2	3	4	5	6	7	8	9
	9	8	7	6	5	4	3	2	1
	10								





### 3. Tìm cánh hoa cho mỗi chú ong.

The image shows a central pink flower with five petals. Each petal contains a number: the top petal has 5, the left petal has 6, the right petal has 10, the bottom petal has 9, and the bottom-left petal has 5. Five bees are arranged around the flower, each with a math problem on its body. Blue lines connect each bee to a specific petal on the flower:

- Top-left bee:  $3 + 2$  is connected to the top petal (5).
- Top-right bee:  $7 + 3$  is connected to the right petal (10).
- Right bee:  $4 + 1$  is connected to the right petal (10).
- Bottom-right bee:  $2 + 8$  is connected to the bottom petal (9).
- Bottom-left bee:  $3 + 3$  is connected to the bottom-left petal (5).
- Left bee:  $6 + 3$  is connected to the left petal (6).

Vận dụng





# DẶN DÒ

 \* GV ĐIỀN Ở ĐÂY

 \* GV ĐIỀN Ở ĐÂY

 \* GV ĐIỀN Ở ĐÂY

Chúc các em  
học tốt!

